

\*\*\*\*\*

**I. Tick the correct spelling.**

**2 Marks**

1. 40 – forty [ ]      forurty [ ]
2. 19 – ninteen [ ]    nineteen [ ]
3. 18 – eighteen [ ]    eigteen [ ]
4. 70 – seventy [ ]    sewentee [ ]

**II. Write the missing numbers.**

**4 Marks**

121			
131			134
	142		

**III. Write the numbers that comes after , before and between.**

**6 Marks**

1. \_\_\_\_\_ 136.
2. 110 \_\_\_\_\_
3. 184 \_\_\_\_\_
4. 179 \_\_\_\_\_ 181.
5. 112 \_\_\_\_\_ 114.
6. \_\_\_\_\_ 197.

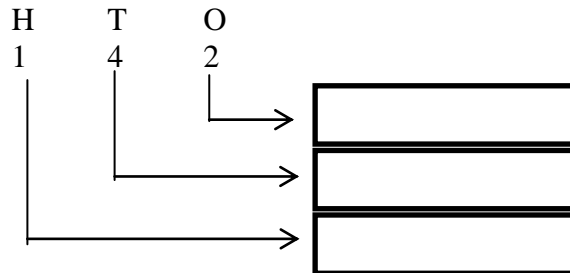
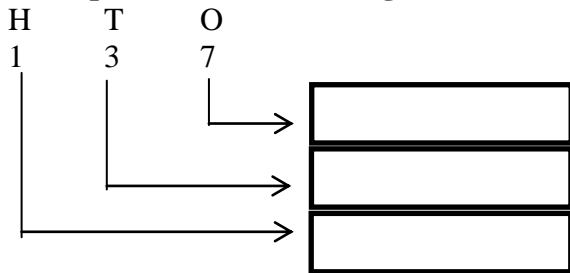
**IV. Fill in the missing letters in these number names.**

**4 Marks**

1. Ninet \_\_\_ si \_\_\_
2. Si \_\_\_ ty \_\_\_ fo \_\_\_ r.
3. Eig \_\_\_ te \_\_\_ n.
4. Fi \_\_\_ ty \_\_\_ ne.

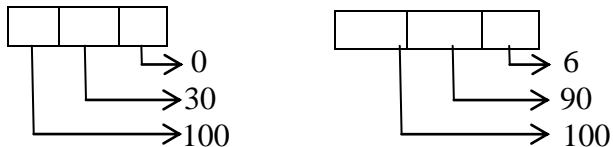
**V. Write the place value of each digit.**

**2 Marks**



**VI. Write the number.**

**2 Marks**



**VII. Tick [  ] the smallest number.**

**2 ½ Marks**

1. 34 [ ]      100 [ ]      15 [ ]
2. 136 [ ]    137 [ ]      138 [ ]
3. 56 [ ]      156 [ ]      140 [ ]
4. 111 [ ]    112 [ ]      110 [ ]
5. 132 [ ]    23 [ ]        32 [ ]

**VIII. Write down the following table.**

**2 ½ Marks**

3 x 1 = 3