
I. Write 1 to 50 numbers.

6 Marks

1									
									50

II. Write the number names from 1 to 10.

5 Marks

_____	_____
_____	_____
_____	_____
_____	_____
_____	_____

II. Write the missing numbers.

3 Marks

1			4				8		
---	--	--	---	--	--	--	---	--	--




III. Write the numbers in checks.

3 Marks

50					55
				60	

V. Count and write the following.

5 Marks



VI. Write down the following table.

3 Marks

1 x 1 = 1